



Name _____ Date _____

SUBTRACTION


Subtract and write the correct answer in the box.



$10 - 8 =$



$9 - 7 =$



$9 - 4 =$



$10 - 6 =$