



Name _____ Date _____

SUBTRACTION


Subtract and write the correct answer in the box.



$$8 - 4 =$$



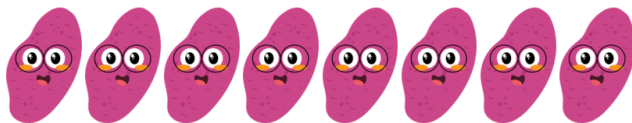
$$9 - 5 =$$



$$9 - 6 =$$



$$7 - 5 =$$



$$8 - 6 =$$